















**MATEMATIKA , 7. tř., 10.týden 25.5.-29.5.2020**

 49Kč		ano ne
 8Kč		ano ne
 65Kč		ano ne
 14Kč		ano ne
 17Kč		ano ne
 27Kč		ano ne
 32Kč		ano ne

# Vægt

Hvad vejer tingene?



4 kilo




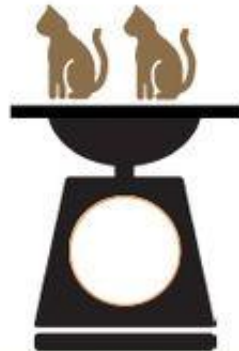
6 kilo



2 kilo



5 kilo



$$\text{☀️} + \text{☀️} + \text{☀️} = 30$$

$$\text{☀️} + \text{🌙} + \text{🌙} = 20$$

$$\text{🌙} - \text{☔️} = 4$$

$$\text{☀️} + \text{🌙} + \text{☔️} = ???$$

[www.matematicagenial.com](http://www.matematicagenial.com)

$$\text{🍊} + \text{🍊} = 14$$

$$\text{🍊} + \text{🍏} = 18$$

$$\text{🍊} + \text{🍊} = 13$$

$$\text{🍊} = ? \quad \text{🍊} = ? \quad \text{🍏} = ?$$

Brainfans.com

$21 + \underline{\quad} = 100$

$60 + \underline{\quad} = 100$

$36 + \underline{\quad} = 100$

$62 + \underline{\quad} = 100$

$63 + \underline{\quad} = 100$

$20 + \underline{\quad} = 100$

$66 + \underline{\quad} = 100$

$27 + \underline{\quad} = 100$

$24 + \underline{\quad} = 100$

$28 + \underline{\quad} = 100$

$15 + \underline{\quad} = 100$

$42 + \underline{\quad} = 100$

$38 + \underline{\quad} = 100$

$83 + \underline{\quad} = 100$

$68 + \underline{\quad} = 100$

$41 + \underline{\quad} = 100$

$37 + \underline{\quad} = 100$

$52 + \underline{\quad} = 100$

$19 + \underline{\quad} = 100$

$35 + \underline{\quad} = 100$

$74 + \underline{\quad} = 100$

$70 + \underline{\quad} = 100$

$80 + \underline{\quad} = 100$

$59 + \underline{\quad} = 100$

## 15 Minute Match Up

View the time on the clocks. Draw a line from the digital time to the correct time on the clock.



7:15



2:30



11:45



9:00



1:15



5:30



12:45



4:00



6:15



10:30



3:45



8:00

Děkuji za spolupráci milí žáci 😊