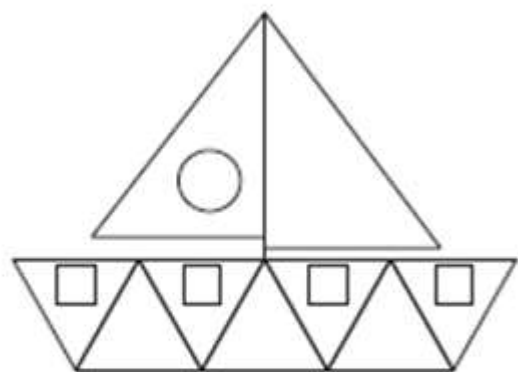
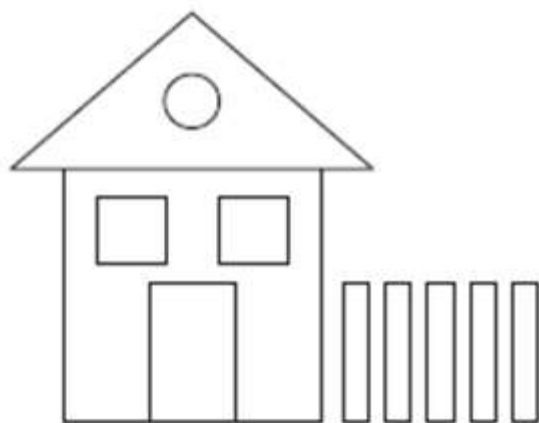


TVARY

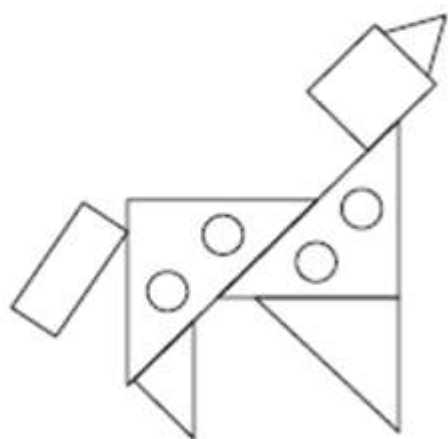
Pozoruj, počítej a zapiš počet jednotlivých geometrických tvarů.



□	_____
○	_____
△	_____



□	_____
○	_____
△	_____
▭	_____



□	_____
○	_____
△	_____
▭	_____