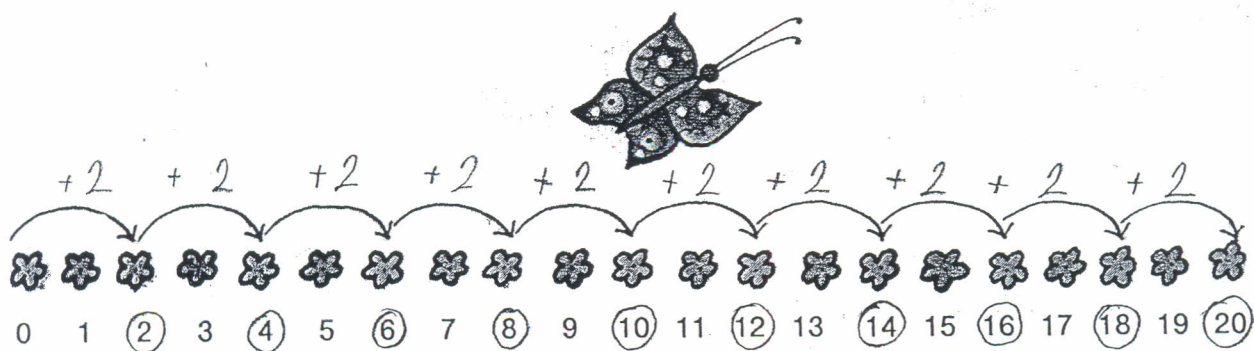


1. Na které kytičky si sedal motýlek?



2	4	6	8	10	12	14	16	18	20
---	---	---	---	----	----	----	----	----	----

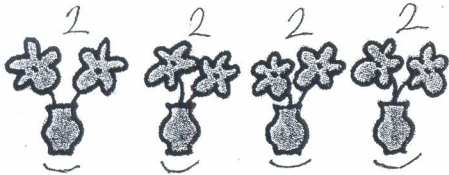
2. Říkejte z paměti násobky dvou.

2	4	6	8	10	12	14	16	18	20
---	---	---	---	----	----	----	----	----	----

• čteme krát $4 \cdot 2 = 8$

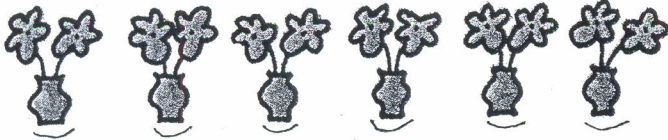
4 krát $2 = 8$

3. Zapište jako násobení.

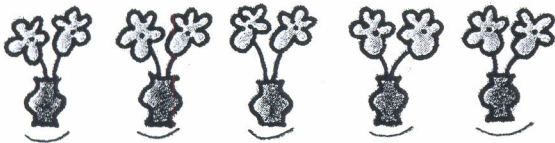


$$2 + 2 + 2 + 2 =$$

$$4 \cdot 2 = \underline{\quad}$$




$$2 + 2 + 2 + 2 + 2 + 2 = 6 \cdot 2 = \underline{\quad}$$



$$2 + 2 + 2 + 2 + 2 = \underline{\quad} = \underline{\quad}$$

4. Napište jako násobení.

$$\begin{aligned} \underline{2} + \underline{2} + \underline{2} &= 3 \cdot 2 \\ \underline{2} + \underline{2} + \underline{2} + \underline{2} + \underline{2} + \underline{2} + \underline{2} &= \\ \underline{2} + \underline{2} + \underline{2} + \underline{2} &= \\ \underline{2} + \underline{2} + \underline{2} + \underline{2} + \underline{2} + \underline{2} + \underline{2} + \underline{2} &= \end{aligned}$$



5. Říkej násobky a ukazuj na prstech

